
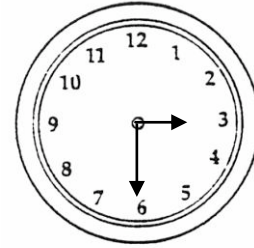


¿Qué Hora Es?

1. Contesta con frases completas. ¿Qué hora es en cada reloj?




3:35pm




3:30am

Son las tres y treinta y cinco de la tarde.




7:55am




1:15pm

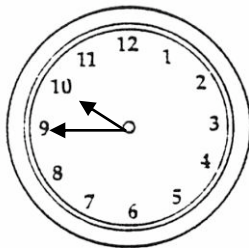
Son las ocho menos cinco de la mañana.




2:10am



7:25pm



9:45pm



3:35am